

HW-6: PORE PRESSURE PREDICTION GIVEN UNLOADING (VELOCITY TO EFFECTIVE STRESS)

ANSWERS

We will use the Bowers Approach (after Bowers (1995)):

$$\sigma'_v = \sigma_v - u \quad \text{Eq. 1}$$

$$u = \sigma_v - \sigma'_v \quad \text{Eq. 2}$$

For the virgin consolidation curve, the Bowers relation is as follows:

$$v = 5000 + A\sigma'^B \quad \text{Eq. 3a}$$

$$\sigma' = \left(\frac{v-5000}{A} \right)^{\frac{1}{B}} \quad \text{Eq. 3b}$$

$$u = \sigma_v - \left(\frac{v-5000}{A} \right)^{\frac{1}{B}} \quad \text{Eq. 3c}$$

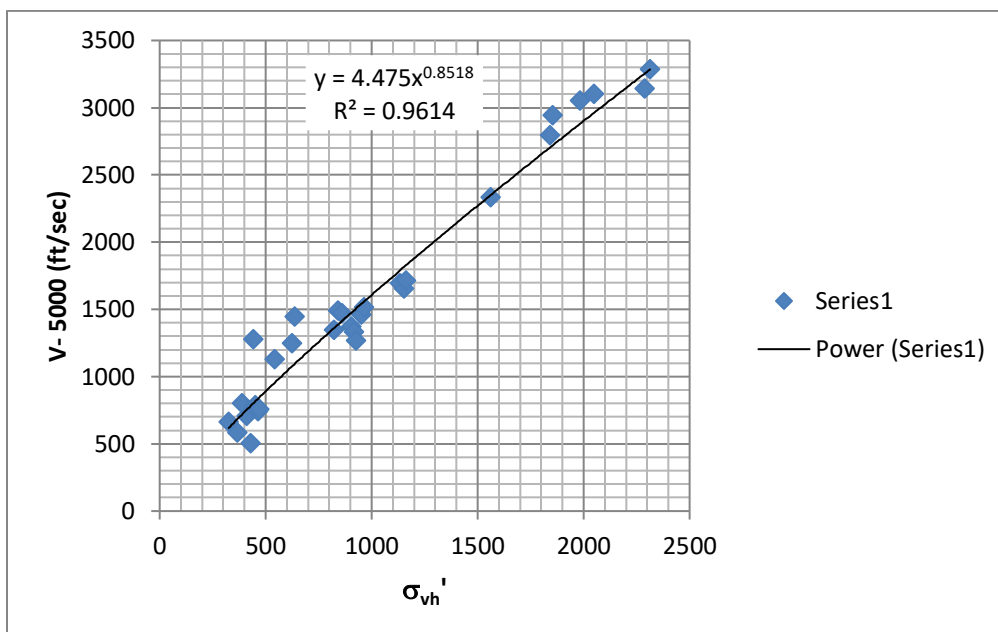


Fig. 1: Velocity vs. hydrostatic effective stress to a depth of 6500' in the Pathfinder well. Parameters A and B (Eq. 3a) are found to be: that A=4.475 and B = 0.852

In your previous exercise you predicted the pressure profile shown below:

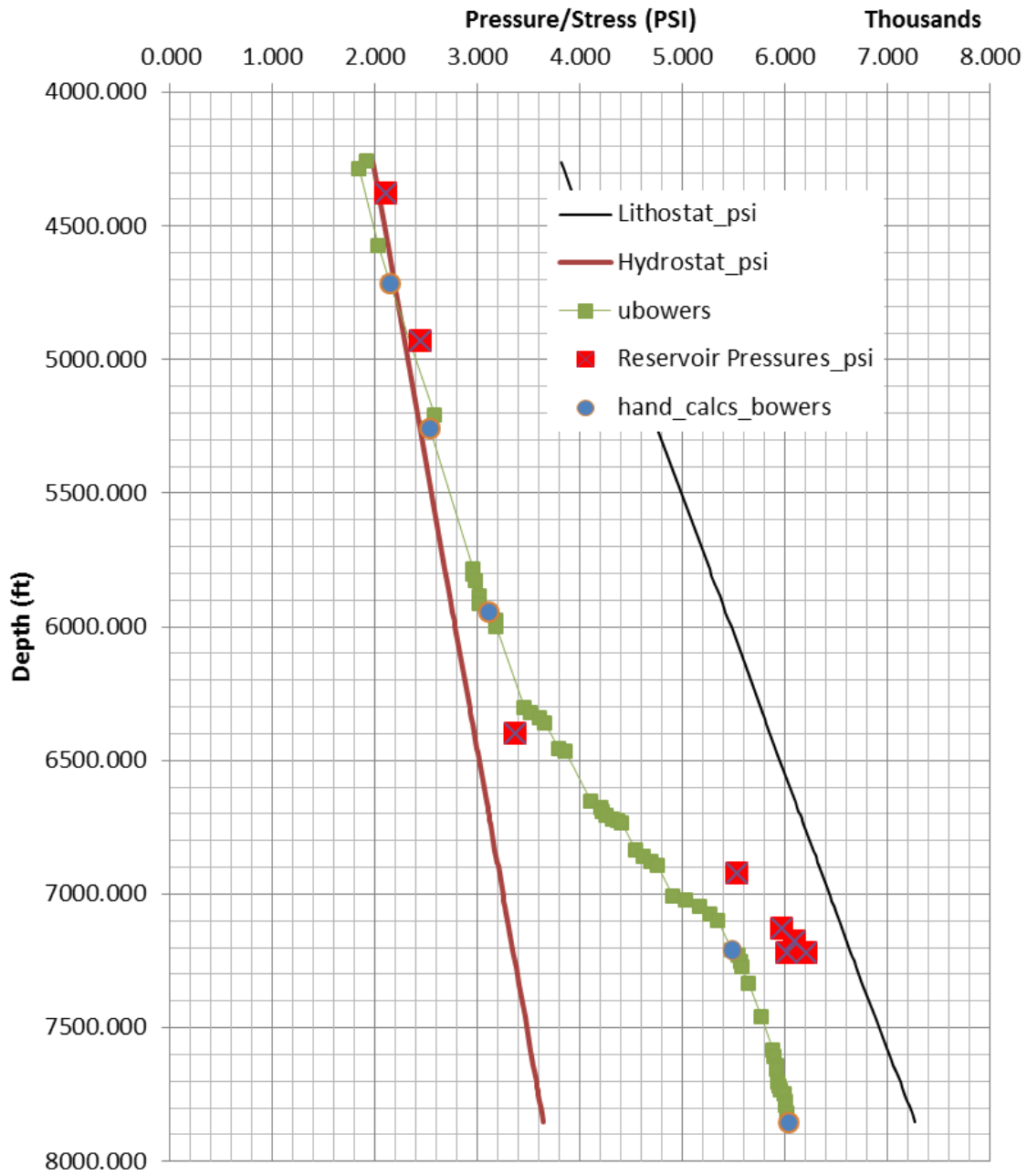


Fig. 2: Pressure prediction from Bowers technique with no unloading.

You also calculated the following result based on Equations 1-3:

Label	Depth (ft)	Vel (ft/s)	n	Uh (psi)	Sv (psi)	u (psi)	σ_v'
a	4717	8102	.243	2189	4239	2080	2159
b	5258	8289	.235	2440	4754	2442	2312
c	5945	8439	.229	2757	5423	2986	2437
d	7210	6668	.307	3345	6638	5595	1043
e	7854	6788	.302	3644	7273	6142	1131

Table 1

1. To consider the process of unloading, plot porosity (n) vs. effective stress from Table 1 label each point (a, b, c, etc). Imagine that you are a sediment package being buried along the pressure-depth profile shown in Figure 2. What is the evolution of your effective stress?

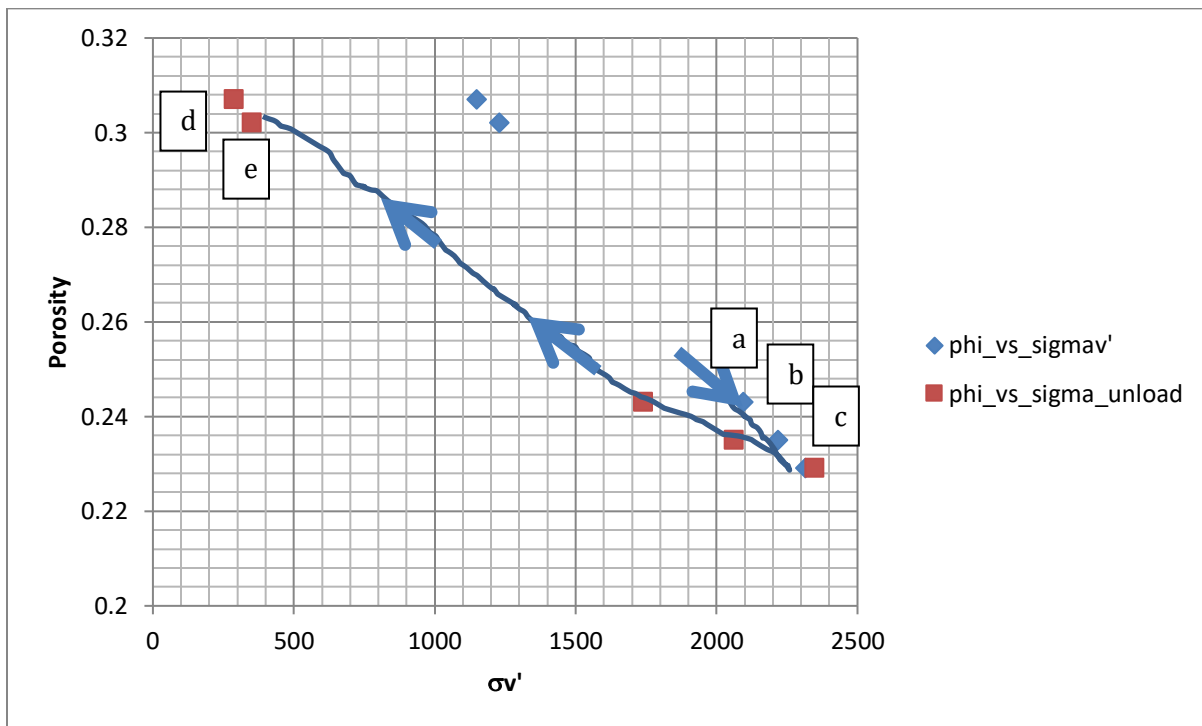


Fig. 3: Plot porosity vs. effective stress for Table 1. Label points a through e.

2. Next, plot velocity vs. effective stress for Table 1:

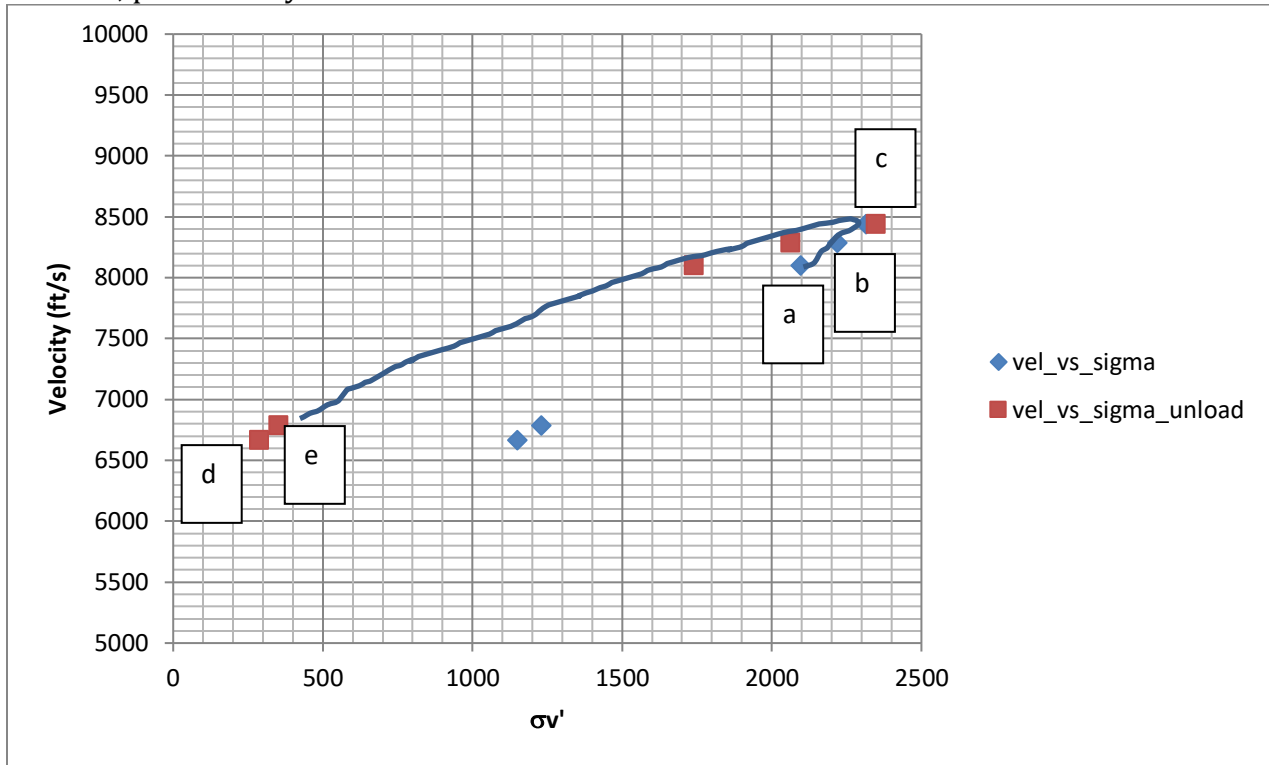


Fig. 4: Plot velocity vs. effective stress for Table 1. Label points a through e.

Bowers (1995) has proposed that if unloading has occurred, the velocity-effective stress relationship is as follows:

$$v = 5000 + A \left(\sigma_{max}' \left(\frac{\sigma}{\sigma_{max}'} \right)^{\left(\frac{1}{U} \right)} \right)^B \quad \text{Eq. 4}$$

Where A and B are as previously defined (e.g. Fig. 1). U is a third parameter and:

$$\sigma_{max}' = \left(\frac{v_{max} - 5000}{A} \right)^{\frac{1}{B}} \quad \text{Eq. 5}$$

V_{max} is usually set to equal the velocity at the depth where the velocity reversal takes place. This assumes that all formations within the reversal at one time passed through the same maximum stress state. This may not be generally true. However, Bowers (1995) states that it has been found to work satisfactorily. The maximum velocity is approximately 8439ft/sec at 6000 ft of depth (Fig. 5). Based on Eq. 5 and given $V_{max} = 8439$ ft/sec, $\sigma_{max} = 2300$ psi (Fig. 6) (we assume $A=4.475$ and $B = 0.852$ for Eq. 5, fig. 1).

Equation 4 can be re-arranged:

$$\sigma' = \sigma'_{max} \left[\frac{1}{\sigma'_{max}} \left(\frac{v - 5000}{A} \right)^{\frac{1}{B}} \right]^U \quad \text{Eq. 6}$$

Therefore, in the unloaded zone, pressure can be solved for as:

$$u = \sigma - \sigma'_{\max} \left[\frac{1}{\sigma'_{\max}} \left(\frac{v-5000}{A} \right)^{\frac{1}{B}} \right]^U \quad \text{Eq. 7}$$

Equation 6 and 7 are solved in a simple spread sheet application that you are provided.

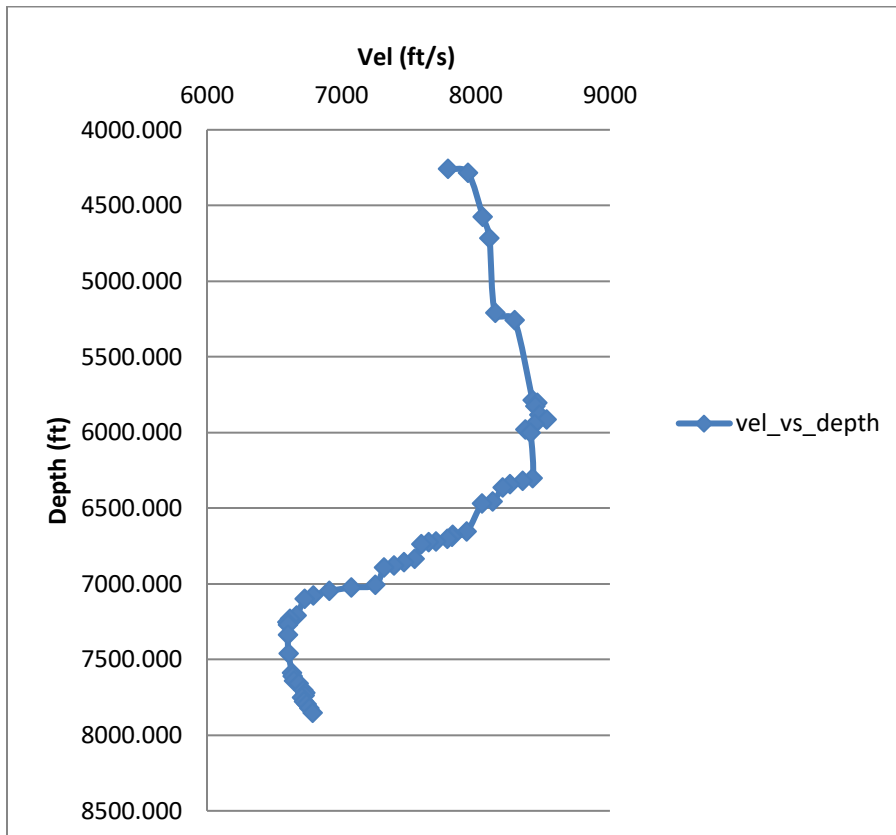


Fig. 5: The maximum velocity is approximately 8439ft/sec at 6000 ft of depth.

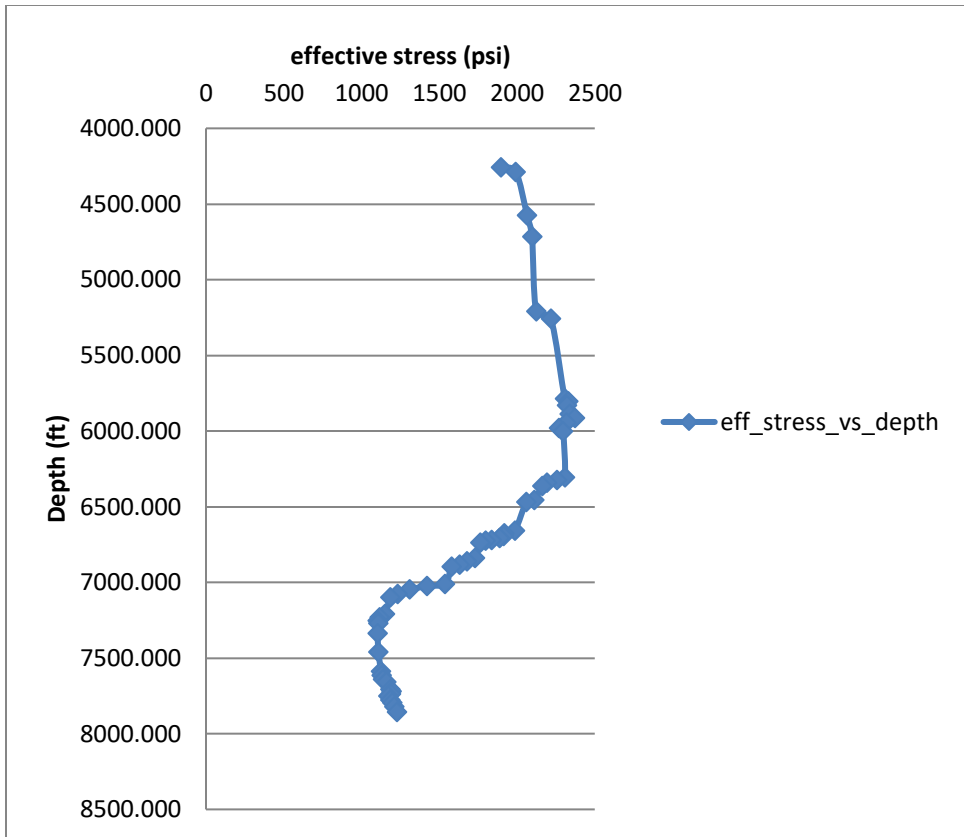


Fig. 6: The maximum effective stress is approximately 2300 psi at a depth of 6000 feet.

A	4.475
B	.852
U	2 (variable, but 3 is suggested by Bowers for GOM)
V_{max}	8439 ft/sec
σ_{max}' (Eq. 5)	2434 psi

Table 2: Table of input parameters.

- Calculate the value of the pore pressure and fill in the table below and then plot these values in Figure 2. A spread sheet is provided for the below calculations. Please plot these values in Figures 3 and 4. Please think about how the rock is buried. Next, plot the loading history of the material predicted by this model. Points above 6000 feet should lie on the original compression line and points below 6000 feet should lie on the unloaded line.

label	Depth (ft)	Vel (ft/s)	n	Uh (psi)	Sv (psi)	u	sv'	u unload	sv' unload
a	4717	8102	0.243	2189	4239	2143	2096	2323	1916
b	5258	8289	0.235	2440	4754	2536	2218	2556	2198
c	5945	8439	0.229	2757	5423	3107	2316	2982	2441
d	7210	6668	0.307	3345	6638	5489	1149	6191	447
e	7854	6788	0.302	3644	7273	6044	1229	6747	526

Table 3: Answer set

- Finally, on the excel spread sheet vary the parameters U and V max to get a sense of the unloading behavior. Try as you look at the plots to think about the stress history of any particular package of sediment.

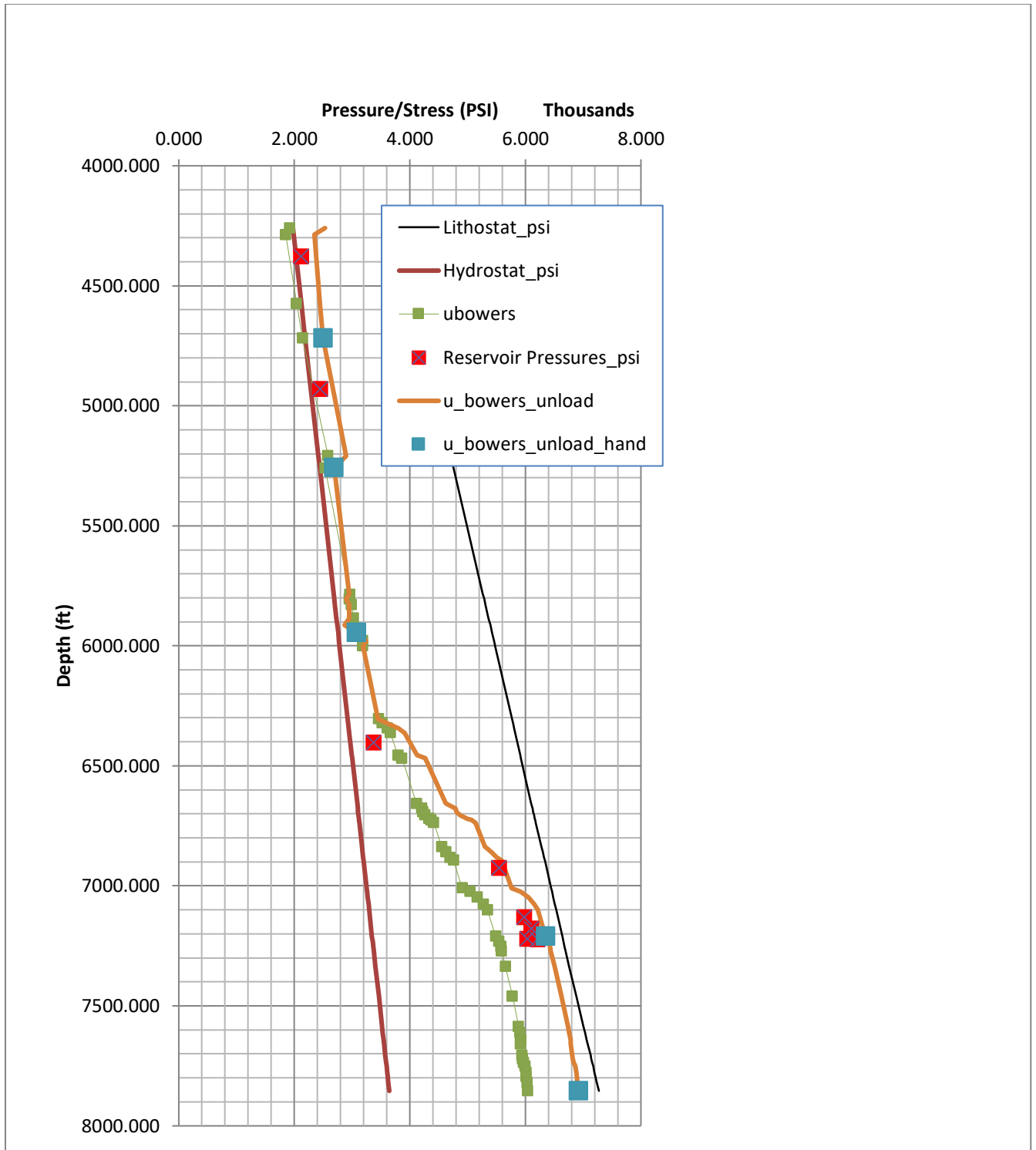


Fig.7: Answer

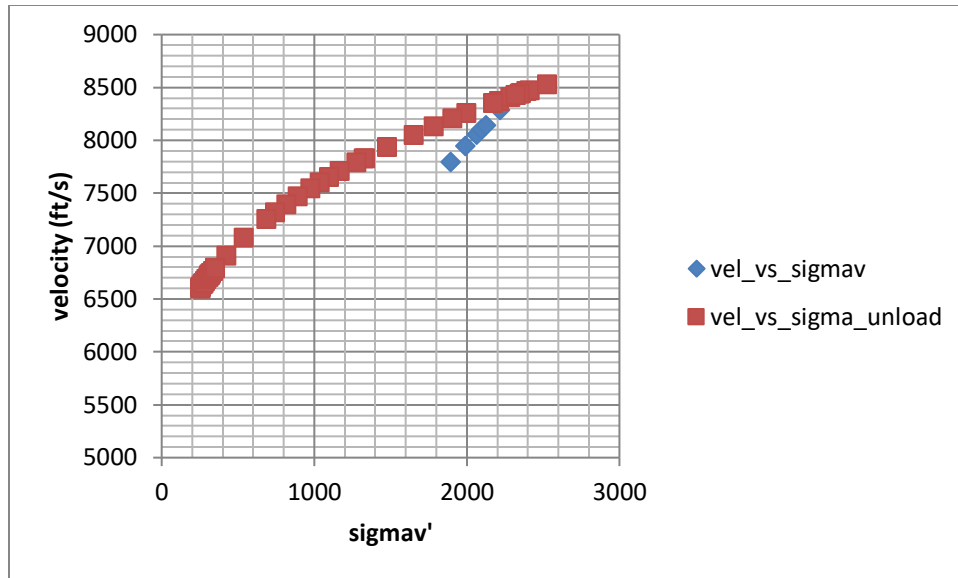


Illustration of unloading curve predicted (red) vs. virgin consolidation relationship (blue).